




Name \_\_\_\_\_

# Ordering Numbers

You can use place value to order numbers.  
Order these from least to greatest.



Compare the thousands.

1 thousand < 2 thousands, so 1,362 is the least number.

Compare the hundreds in the remaining two numbers.

4 hundreds > 1 hundred, so 2,436 is the greatest number.

From least to greatest, the order is:

**1,362**  
least

**2,135**

**2,436**  
greatest

Order the numbers from least to greatest.

1. 560 583 552

\_\_\_\_\_

2. 583 575 590

\_\_\_\_\_

3. 576 580 557

\_\_\_\_\_

Order the numbers from greatest to least.

4. 973 1,007 996

\_\_\_\_\_

5. 5,626 5,636 5,716

\_\_\_\_\_

6. **Number Sense** Use the table.  
Put the roller coasters in order  
from shortest to longest.

\_\_\_\_\_

\_\_\_\_\_

\_\_\_\_\_

Roller Coaster	Length
<b>Boss</b> Eureka, Missouri	5,051 feet
<b>Chang</b> Louisville, Kentucky	4,155 feet
<b>Titan</b> Arlington, Texas	5,312 feet

# Ordering Numbers

Order the numbers from least to greatest.

1. 216 208 222

\_\_\_\_\_

2. 3,795 3,659 3,747

\_\_\_\_\_

Order the numbers from greatest to least.

3. 633 336 363

\_\_\_\_\_

4. 5,017 5,352 5,193

\_\_\_\_\_

Use the table for 5–6.

5. **Number Sense** New Hampshire has a land area of 8,968 square miles. Which states have a greater land area than New Hampshire?

\_\_\_\_\_

\_\_\_\_\_

**Land Areas (in square miles)**

State	Land Area
Maryland	9,774
Massachusetts	7,840
New Jersey	7,417
Vermont	9,250

6. Order the states in the table from greatest to least land area.

\_\_\_\_\_

7. **Writing to Explain** The Amazon River is 4,000 miles long. The Yangtze River is 3,964 miles long and the Nile River is 4,145 miles long. Write the steps you would use to order the lengths of the rivers from greatest to least.

\_\_\_\_\_

\_\_\_\_\_

8. Which number is between 6,532 and 6,600?

6,570

6,523

6,325

5,623

9. Which number makes this sentence true?

4,735 &lt; \_\_\_\_\_ &lt; 4,820

4,396

4,758

4,832

4,915